


Name: _____

Math

Graphing Ocean Animals

Directions : Color each animal a different color. Count how many of each animal there are and graph below.



shark	dolphin	crab	fish	octopus

Name: _____

Math

I Can Write My 123s


Directions : Write the numbers one through twenty. When you are done, say the numbers out loud.

Name: _____


Math

What's Next?

Directions : Look at the number. What number comes next? Write that number in the blank.




18,



4,




0,



11,




6,



9,



15,






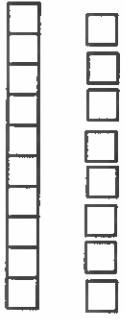

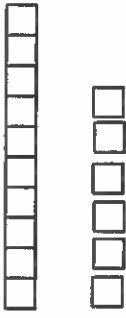

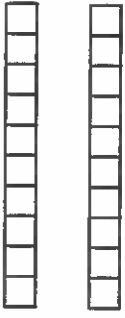

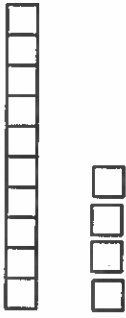


7,

Name: _____

Math

Base Ten

Directions : Count how many base ten blocks there are in each section. Cut and paste the number to the right spot.



Copyright © 2015 A Dab of Glue Will Do

www.adabofgluedo.com

14	18	7
20	9	16

Copyright © 2015 A Dab of Glue Will Do

www.adabofgluedo.com


Name: _____

Math

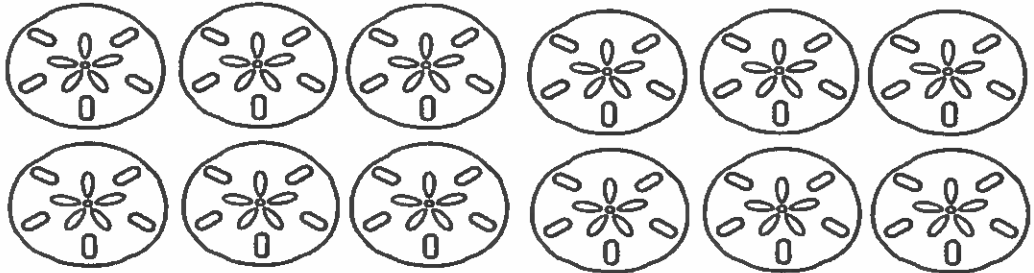
Count and Color

Directions : Look at the number. Color that many objects. For example, if the number is 3, color 3 pictures.


4




9



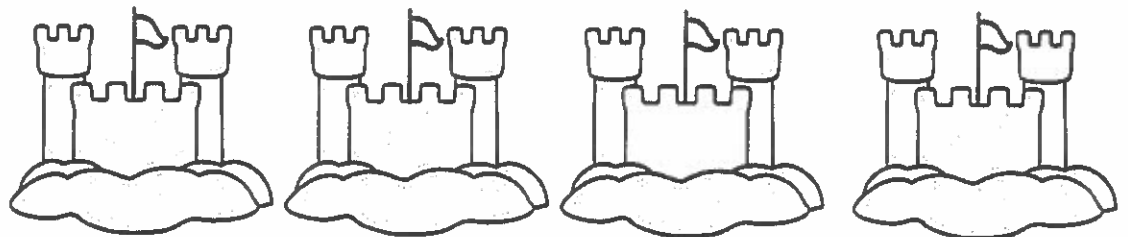
7



5



3







Name: _____

Math



What's Next?

Directions : Look at the pattern for each row. Cut out squares on bottom and glue in the correct box to complete the pattern.



Copyright © 2015 A Dab of Glue Will Do

www.adabofgluewildo.com



Copyright © 2015 A Dab of Glue Will Do

www.adabofgluewildo.com

Name: _____

Math

After Me I See

Directions : Read the first number in each line and then write the seven numbers that follow.

0, _____, _____, _____, _____, _____, _____, _____

14, _____, _____, _____, _____, _____, _____, _____

85, _____, _____, _____, _____, _____, _____, _____

61, _____, _____, _____, _____, _____, _____, _____

26, _____, _____, _____, _____, _____, _____, _____

49, _____, _____, _____, _____, _____, _____, _____


Name: _____

Math

Flower Power


Directions : Complete the addition and subtraction problems. Refer to the box below and color flowers according to each flower's answer.

0 = yellow, 1 = red, 2 = purple, 3 = blue, 4 = pink

 $2+2$

 $5-2$

 $2+1$

 $6-5$

 $4-2$


 $1+3$


 $1+1$

 $3-3$

 $4+0$

 $0+0$

 $1+0$

 $6-4$

Name: _____

Math

Stars and Stripes

Directions : Complete the addition and subtraction problems. Refer to the box below and color stars according to each their answer.

5 = yellow, 6 = red, 7 = orange, 8 = blue, 9 = green

$5 + 4$

$6 + 1$

$10 - 4$

$2 + 7$

$8 - 3$

$6 + 2$

$11 - 6$

$6 + 0$

$2 + 5$

$4 + 3$

$1 + 7$

$12 - 7$

$2 + 6$

$12 - 3$

$7 + 1$







$13 - 7$

Name: _____



Math

Show Me the Money

Directions : Color each coin based on the graph below.

					
dime = blue	nickel = yellow		penny = red		



	
quarter = green	



Name: _____

Math

Addition Word Problems

Directions : Read the word problem and draw a picture to solve it.
Write a number sentence when done.

Sally had three popsicles and Molly had two. How many did both of them eat?

$$\underline{\quad} + \underline{\quad} = \underline{\quad}$$

Ryan found six shells at the beach. His sister found four. How many shells did they find total?

$$\underline{\quad} + \underline{\quad} = \underline{\quad}$$

Ryan had ten goldfish for a snack. Jacob had nine. How many did they both eat?

$$\underline{\quad} + \underline{\quad} = \underline{\quad}$$

Jane has lost two teeth. Jack has lost three. How many have they both lost?

$$\underline{\quad} + \underline{\quad} = \underline{\quad}$$

Name: _____

Math

Subtraction Word Problems

Directions : Read the word problem and draw a picture to solve it.
Write a number sentence when done.

Sammy saw seven dolphins in the ocean. Two swam away. How many does she see now?

_____ - _____ = _____

Lexi and Jon found nine frogs. Six hopped away. How many do they still have?

_____ - _____ = _____

George brought nine beach balls to the pool. He lost three of them. How many does he have left?

_____ - _____ = _____

Laura had fifteen pieces of chocolate. She ate four more. How many more does she have left?

_____ - _____ = _____